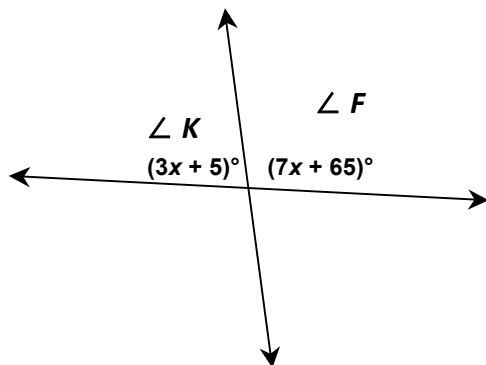


Name: _____ Date: _____ Period: _____

Homework #2

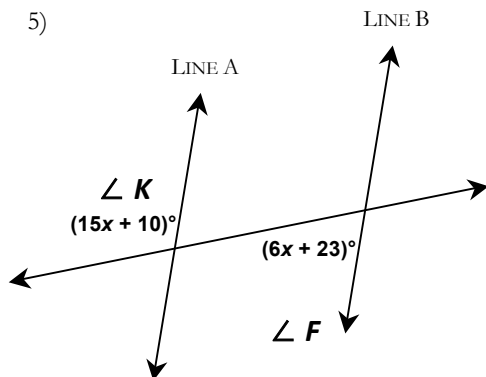
4)



$\angle K =$ _____

$\angle F =$ _____

5)

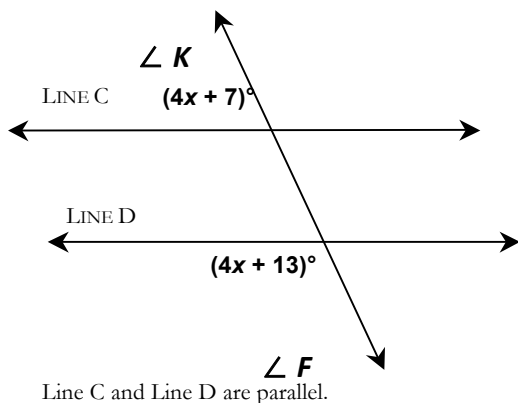


Line A and Line B are parallel.

$\angle K =$ _____

$\angle F =$ _____

6)



Line C and Line D are parallel.

$\angle K =$ _____

$\angle F =$ _____